

Name: _____

3-D Shapes

Directions: Match the picture to its 3-dimensional shape.





sphere


cone

cube

cylinder

rectangular
prism





Name: _____

3-D Shapes

Answer Key

Directions: Match the picture to its 3-dimensional shape.

sphere

cone

cube

cylinder

rectangular
prism

