

Name: _____


Date: _____



How Much Time?

Half Hour


Worksheet 1




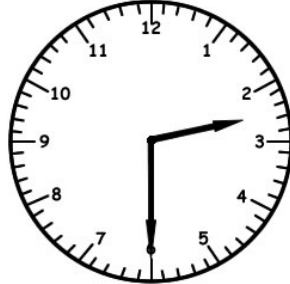
Write the time inside each clock below. Tell how much time has passed.

1)

Fred started cooking at...




Fred ate lunch at...



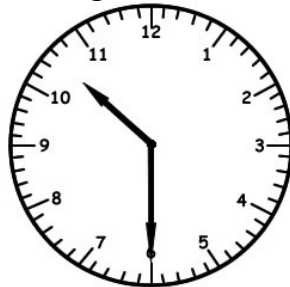
How much time has passed?

2)

Alex went to the store at...




Alex got home at...




How much time has passed?

3)

Joe went to bed at...



Joe woke up at...



How much time has passed?

Name: _____


Date: _____



How Much Time?

Half Hour

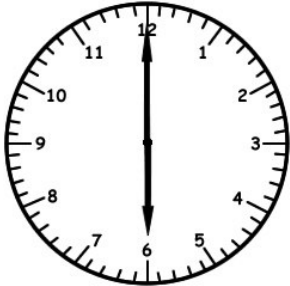
Worksheet 2





Write the time inside each clock below. Tell how much time has passed.

1)

Stew started work at...




Stew got out of work at...




How much time has passed?

2)

Kate went to dinner at...



Kate went home at...




How much time has passed?

3)

Tyler used the phone at...



Tyler hung up at...



How much time has passed?

Name: _____


Date: _____



How Much Time?

Half Hour


Worksheet 3




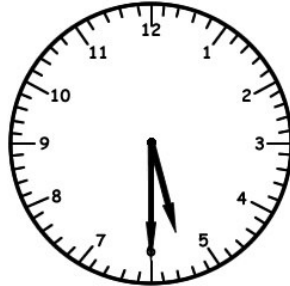
Write the time inside each clock below. Tell how much time has passed.

1)

Jordan went outside at...



Jordan went inside at...



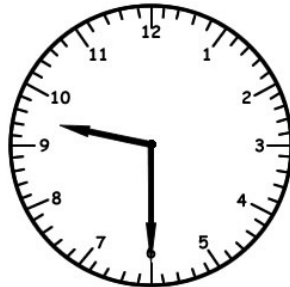
How much time has passed?

2)

Jose went to the gym at...



Jose went home at...





How much time has passed?

3)

Walter's game was at...



Walter got home at...



How much time has passed?

Name: _____


Date: _____



How Much Time?

Half Hour



Worksheet 4




Write the time inside each clock below. Tell how much time has passed.

1)

Tim got sick at...




Tim felt better at...



How much time has passed?

2)

Paul mowed the lawn at...



Paul cut all the grass by...




How much time has passed?

3)

Mark ate breakfast at...



Mark ate dinner at...



CAREFUL...TRICKY!!!!

How much time has passed?

Name: _____


Date: _____



How Much Time?

Half Hour

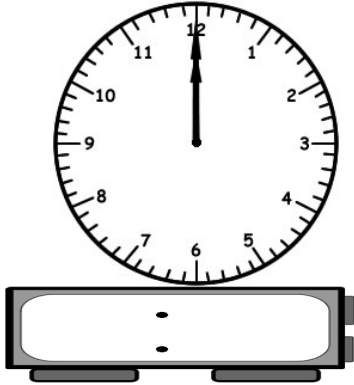
Worksheet 5



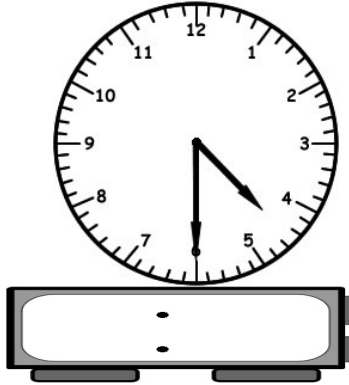
Write the time inside each clock below. Tell how much time has passed.

1)

Matt went to the mall at...




Matt came home at...



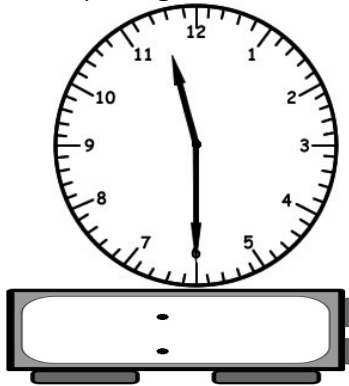
How much time has passed?

2)

Ruby went fishing at...



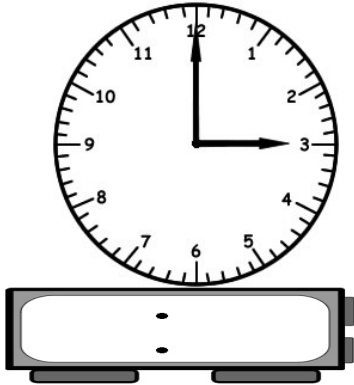
Ruby caught a fish at...




How much time has passed?

3)

Brock played piano at...



His lesson was over at...



How much time has passed?

Name: _____

Date: _____




How Much Time?

Half Hour

Answer Key

Worksheets 1-5



Worksheet 1

- | | | |
|---------|-------|---|
| 1) 2:00 | 2:30 | 30 Minutes (Half Hour) |
| 2) 8:00 | 10:30 | 2 Hours 30 Minutes (2 and a Half Hours) |
| 3) 9:00 | 7:30 | 10 Hours 30 Minutes (10 and a Half Hours) |

Worksheet 2

- | | | |
|----------|-------|---|
| 1) 6:00 | 12:30 | 6 Hours 30 Minutes (6 and a Half Hours) |
| 2) 7:00 | 8:30 | 1 Hour 30 Minutes (1 and a Half Hours) |
| 3) 11:00 | 11:30 | 30 Minutes (Half Hour) |

Worksheet 3

- | | | |
|---------|------|---|
| 1) 4:00 | 5:30 | 1 Hour 30 Minutes (1 and a Half Hours) |
| 2) 7:00 | 9:30 | 2 Hours 30 Minutes (2 and a Half Hours) |
| 3) 2:00 | 5:30 | 3 Hours 30 Minutes (3 and a Half Hours) |

Worksheet 4

- | | | |
|-----------|--------|---|
| 1) 9:00 | 6:30 | 9 Hours 30 Minutes (9 and a Half Hours) |
| 2) 5:00 | 7:30 | 2 Hours 30 Minutes (2 and a Half Hours) |
| 3) 7:00am | 7:30pm | 12 Hours 30 Minutes (12 and a Half Hours) |

Worksheet 5

- | | | |
|----------|-------|---|
| 1) 12:00 | 4:30 | 4 Hours 30 Minutes (4 and a Half Hours) |
| 2) 8:00 | 11:30 | 3 Hours 30 Minutes (3 and a Half Hours) |
| 3) 3:00 | 6:30 | 3 Hours 30 Minutes (3 and a Half Hours) |