


Name: _____

Date: _____



How Much Time?

Quarter Hour

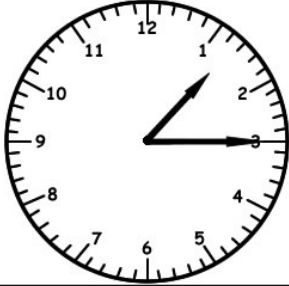
Worksheet 1



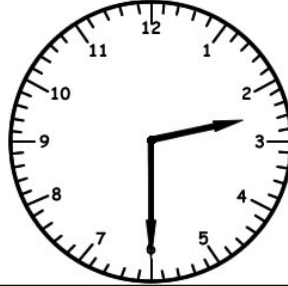
Write the time inside each clock below. Tell how much time has passed.

1)

Jack started cooking at...




Jack ate lunch at...




How much time has passed?

2)

Ken went to the store at...




Ken got home at...



How much time has passed?

3)

Barbie went to bed at...




Barbie woke up at...



How much time has passed?

Name: _____


Date: _____



How Much Time?

Quarter Hour

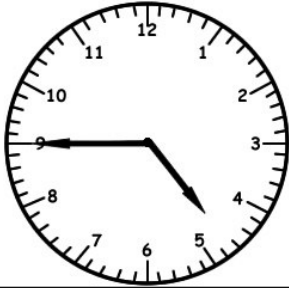
Worksheet 2



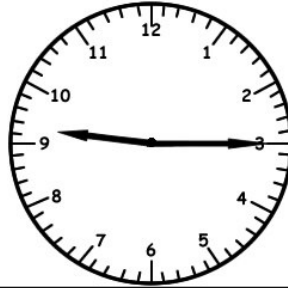
Write the time inside each clock below. Tell how much time has passed.

1)

Stan started work at...




Stan got out of work at...



How much time has passed?

2)

Rose went to dinner at...





Rose went home at...





How much time has passed?

3)

Mr. Z used the phone at...




Mr. Z hung up at...



How much time has passed?

Name: _____

Date: _____



How Much Time?

Quarter Hour


Worksheet 3



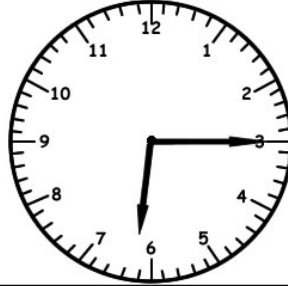
Write the time inside each clock below. Tell how much time has passed.

1)

Cally went outside at...




Cally went inside at...



How much time has passed?

2)

Hank went to the gym at...



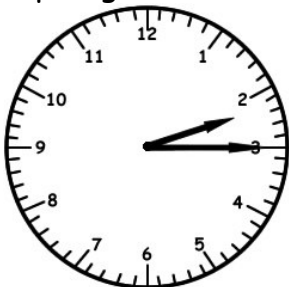
Hank went home at...



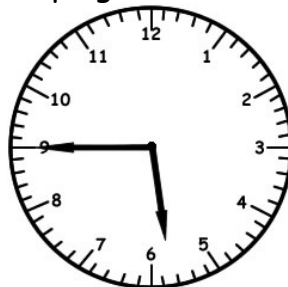
How much time has passed?

3)

Ralph's game was at...




Ralph got home at...



How much time has passed?

Name: _____

Date: _____



How Much Time?

Quarter Hour

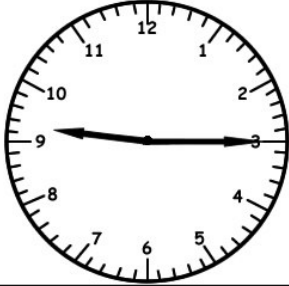
Worksheet 4



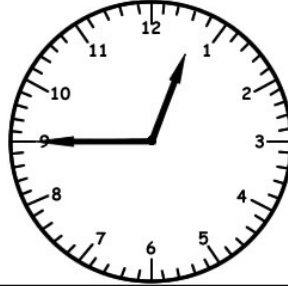
Write the time inside each clock below. Tell how much time has passed.

1)

Boris got sick at...



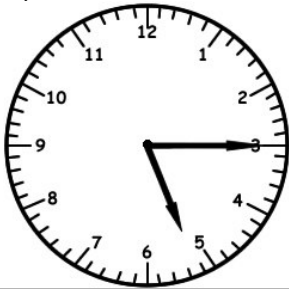
Boris felt better at...




How much time has passed?

2)

Jessy mowed the lawn at...



Jessy cut all the grass by...



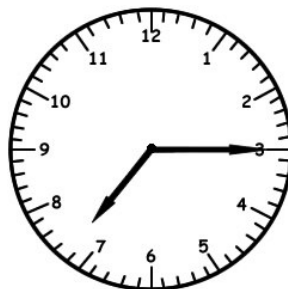
How much time has passed?

3)

Vanessa ate breakfast at...




Vanessa ate dinner at...



CAREFUL...TRICKY!!!!
How much time has passed?

Name: _____


Date: _____



How Much Time?

Quarter Hour

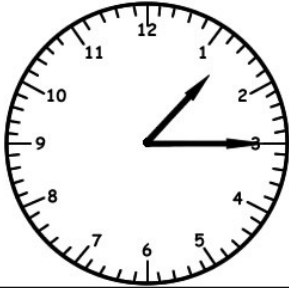
Worksheet 5



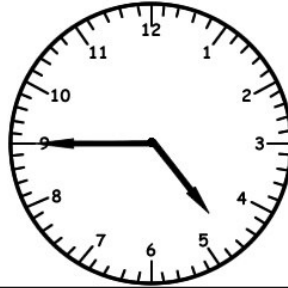
Write the time inside each clock below. Tell how much time has passed.

1)

Ally went to the mall at...




Ally came home at...




How much time has passed?

2)

Kendra went fishing at...



Kendra caught a fish at...



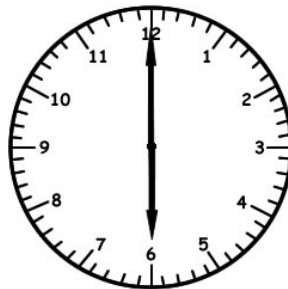
How much time has passed?

3)

Caedmon played piano at...




His lesson was over at...



How much time has passed?

Name: _____

Date: _____




How Much Time?

Quarter Hour

Answer Key

Worksheets 1-5



Worksheet 1

- | | | |
|--------|------|--------------------|
| 1)1:15 | 2:30 | 1 Hour 15 Minutes |
| 2)8:00 | 9:45 | 1 Hour 45 Minutes |
| 3)9:00 | 6:45 | 9 Hours 45 Minutes |

Worksheet 2

- | | | |
|---------|-------|--------------------|
| 1)4:45 | 9:15 | 4 Hours 30 Minutes |
| 2)7:30 | 9:45 | 2 Hours 15 Minutes |
| 3)11:30 | 12:15 | 45 Minutes |

Worksheet 3

- | | | |
|--------|-------|--------------------|
| 1)4:30 | 6:15 | 1 Hour 45 Minutes |
| 2)7:30 | 10:45 | 3 Hours 15 Minutes |
| 3)2:15 | 5:45 | 3 Hours 30 Minutes |

Worksheet 4

- | | | |
|----------|--------|---------------------|
| 1)9:15 | 12:45 | 3 Hours 30 Minutes |
| 2)5:15 | 7:00 | 1 Hour 45 Minutes |
| 3)7:30am | 7:15pm | 11 Hours 45 Minutes |

Worksheet 5

- | | | |
|--------|------|--------------------|
| 1)1:15 | 4:45 | 3 Hours 30 Minutes |
| 2)6:30 | 6:45 | 15 Minutes |
| 3)3:45 | 6:00 | 2 Hours 15 Minutes |